

Write your name here

Surname

Other names

**Pearson Edexcel
International GCSE**

Centre Number

--	--	--	--	--	--

Candidate Number

--	--	--	--	--	--

Pakistan Studies

Paper 2: The Land, People and Resources of Pakistan

Wednesday 13 May 2015 – Morning
Time: 1 hour 30 minutes

Paper Reference

4PA0/02

You do not need any other materials.

Total Marks

Instructions

- Use **black** ink or ball-point pen.
- **Fill in the boxes** at the top of this page with your name, centre number and candidate number.
- Answer **Question 1** and any **three** other questions.
- Answer the questions in the spaces provided – *there may be more space than you need.*

Information

- The total mark for this paper is 60.
- The marks for **each** question are shown in brackets – *use this as a guide as to how much time to spend on each question.*

Advice

- Read each question carefully before you start to answer it.
- Write your answers neatly and in good English.
- Check your answers if you have time at the end.

Turn over ►

P44333A

©2015 Pearson Education Ltd.

1/1/1/1/1



PEARSON

You MUST answer this question.

Some questions must be answered with a cross ☒. If you change your mind about an answer, put a line through the box ☒ and then mark your new answer with a cross ☒.

1 (a) (i) Name the highest mountain peak in Pakistan. (1)

(ii) Name the mountain pass between Pakistan and China. (1)

(iii) Which **one** of the following is the longest glacier in Pakistan?
Put a cross ☒ in the correct box. (1)

- A** Siachen Glacier
- B** Hispar Glacier
- C** Trango Glacier
- D** Rupal Glacier

(iv) Name the major flood plain located in the east of Pakistan. (1)

(v) Name the major plateau located in the west of Pakistan. (1)

(vi) Which resource is **not** found in the Potwar Plateau region?
Put a cross ☒ in the correct box. (1)

- A** Oil
- B** Gypsum
- C** Gold
- D** Limestone



(b) (i) Which **one** of the following is the approximate life expectancy for men in Pakistan today?

Put a cross ☒ in the correct box.

(1)

A 56 years

B 60 years

C 66 years

D 72 years

(ii) Pakistan is bordered by China and Afghanistan. Name **one** other country which borders Pakistan.

(1)

(iii) Which **one** of the following does Pakistan import most from, by value?

Put a cross ☒ in the correct box.

(1)

A Saudi Arabia

B United Arab Emirates

C Malaysia

D USA

(iv) Name the largest city (by population) in Pakistan.

(1)

(v) Which **one** of the following is the approximate percentage of Pakistan's population that live in rural areas?

Put a cross ☒ in the correct box.

(1)

A 52%

B 63%

C 75%

D 80%

(vi) Name the most important seaport in Pakistan.

(1)

(Total for Question 1 = 12 marks)



Answer any THREE of Questions 2–8.

If you answer Question 2 put a cross in the box .

- 2 (a) Study Figure 1 which shows the rainfall recorded for three months in 2010 and the average rainfall for those months over a 30-year period.

July (rainfall mm)		August (rainfall mm)		September (rainfall mm)	
Recorded	Average	Recorded	Average	Recorded	Average
37	63	55	56	93	21

Figure 1

- (i) In which month was there a higher recorded rainfall than average rainfall? (1)

- (ii) Name **one** period of heavy rainfall that occurs in Pakistan every year. (1)

- (iii) Describe **two** responses made by the people of Pakistan to a flood event in their country. (4)

1

.....

.....

.....

2

.....

.....

.....



(b) Outline the importance of the Indus Plain to the economy of Pakistan.

(4)

.....

.....

.....

.....

.....

.....

.....

.....



(c) Explain the reasons for the development of a multi-purpose irrigation scheme in Pakistan.

(6)

(Total for Question 2 = 16 marks)



BLANK PAGE
QUESTION 3 BEGINS ON THE NEXT PAGE.



If you answer Question 3 put a cross in the box .

3 (a) Study Figure 2 which shows some of the factors involved in the process of soil formation.

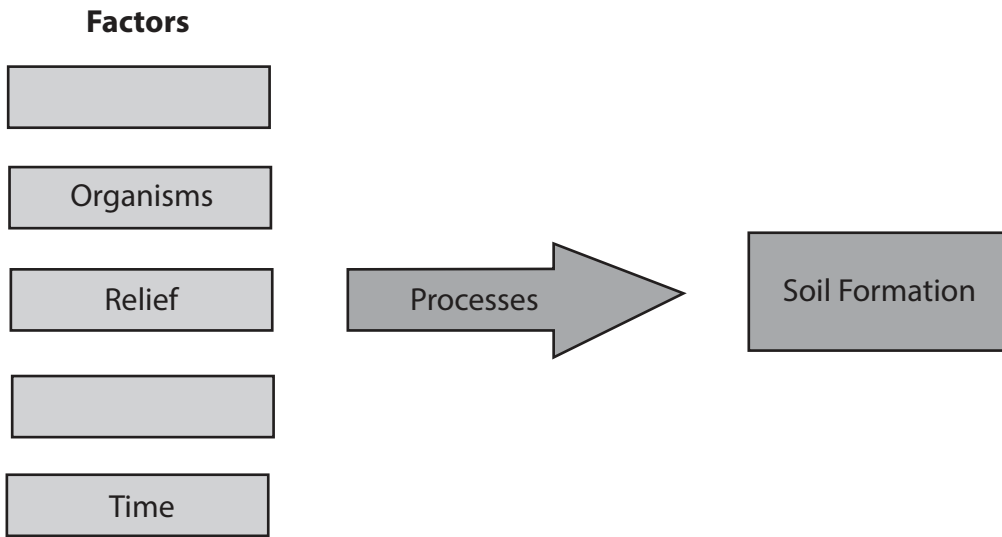


Figure 2

(i) Give **one** other factor involved in the process of soil formation. (1)

(ii) Give **one** way in which soil erosion can be reduced. (1)

(iii) Describe **two** causes of soil salinisation. (4)

1

.....

.....

.....

2

.....

.....

.....



(b) Outline reasons for conserving Pakistan's natural resources.

(4)

.....

.....

.....

.....

.....

.....

.....

.....



(c) Explain the factors influencing the rapid growth of Pakistan's population.

(6)

Dotted lines for writing the answer.

(Total for Question 3 = 16 marks)



BLANK PAGE
QUESTION 4 BEGINS ON THE NEXT PAGE.



If you answer Question 4 put a cross in the box .

- 4 (a) Study Figure 3 which is a diagram showing the structure of Pakistan's population in 2012.

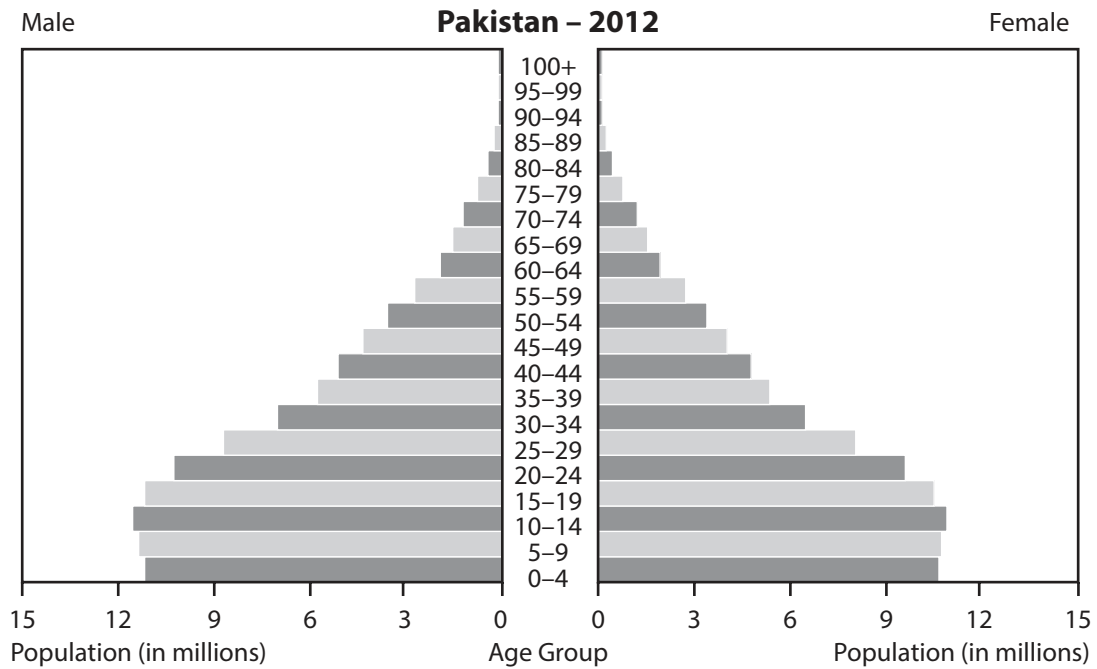


Figure 3

- (i) What is the name of this type of population diagram?

(1)

- (ii) Give **one** reason for the shape of this diagram.

(1)



(iii) Describe physical features of relief and drainage that influence the distribution of Pakistan's population.

(4)

Relief

.....

.....

.....

.....

Drainage

.....

.....

.....

.....

(b) Describe the situation (location) of **one** major city in Pakistan.

(4)

.....

.....

.....

.....

.....

.....

.....

.....



(c) Explain the effects on Pakistan of migration to other countries.

(6)

A series of horizontal dotted lines for writing the answer to the question.

Total for Question 4 = 16 marks)

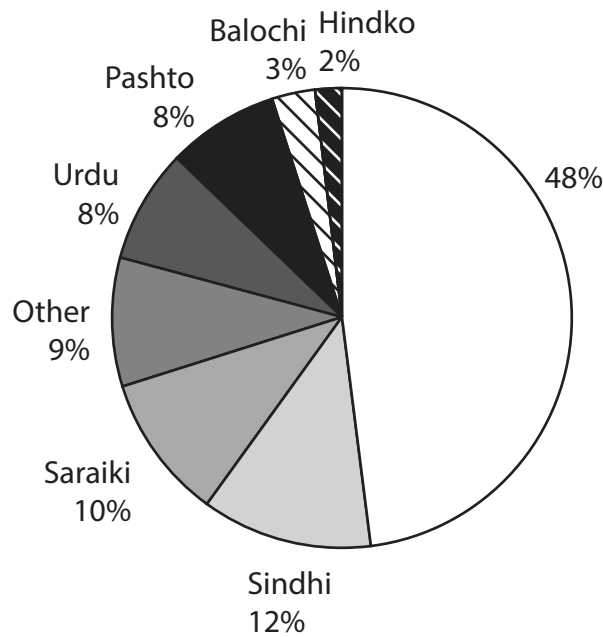


BLANK PAGE
QUESTION 5 BEGINS ON THE NEXT PAGE.



If you answer Question 5 put a cross in the box .

- 5 (a) Study Figure 4 which shows the relative importance of the native languages of Pakistan.



% = percentage of total population speaking each language

Figure 4

- (i) Name the language spoken by 48% of Pakistanis.

(1)

- (ii) Give **one** reason for the large number of languages spoken throughout Pakistan.

(1)



(iii) Describe **two** problems resulting from the large number of native languages.

(4)

1

.....

.....

2

.....

.....

(b) Outline the contribution that women make to the economic life of Pakistan.

(4)

.....

.....

.....

.....

.....

.....

.....

.....



(c) Explain why international agencies provide aid to Pakistan.

(6)

Handwriting practice area consisting of 20 horizontal dotted lines for writing the answer to the question above.

(Total for Question 5 = 16 marks)



BLANK PAGE
QUESTION 6 BEGINS ON THE NEXT PAGE.



If you answer Question 6 put a cross in the box .

6 (a) Study Figure 5 which outlines a farm system involved in rice cultivation.

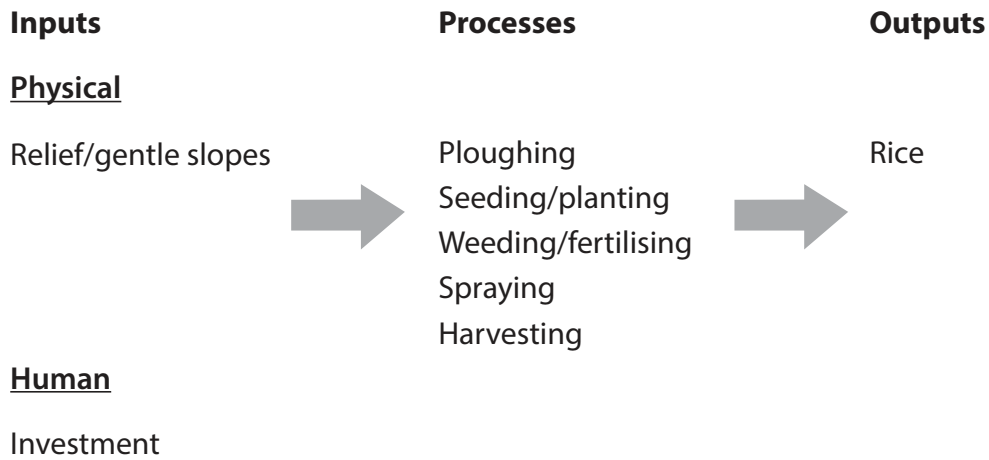


Figure 5

(i) Give **one** other physical input to the farm system. (1)

(ii) There are an estimated 22 million cattle in Pakistan. Give **one** use of these cattle. (1)

(iii) Describe **two** ways in which the 'Green Revolution' has helped to increase agricultural production in Pakistan. (4)

1

2



(b) Outline the characteristics of Pakistan's international trade.

(4)

.....

.....

.....

.....

.....

.....

.....

.....



(c) Explain the problems associated with the development of seaport facilities in Pakistan.

(6)

A series of horizontal dotted lines for writing the answer.

(Total for Question 6 = 16 marks)

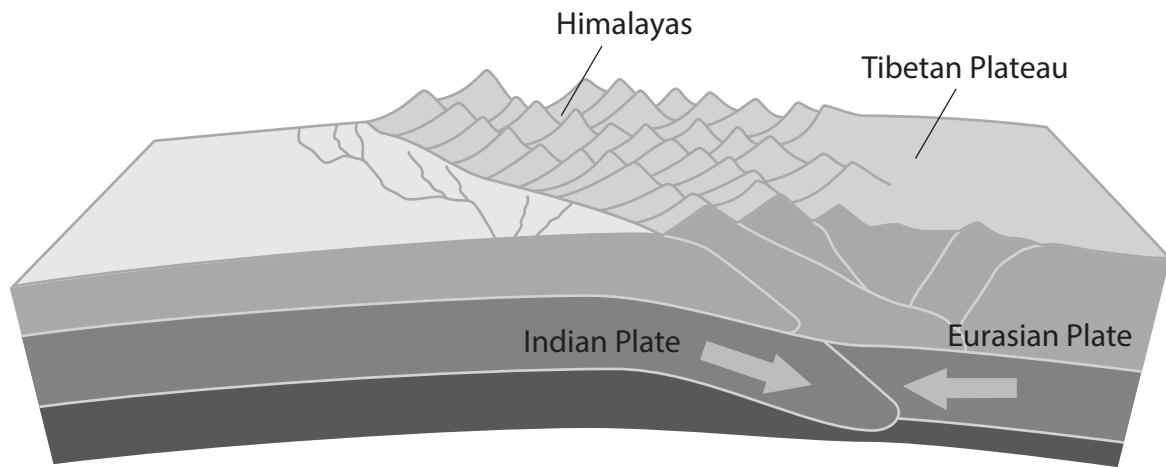


BLANK PAGE
QUESTION 7 BEGINS ON THE NEXT PAGE.



If you answer Question 7 put a cross in the box .

7 (a) Study Figure 6 which is a diagram showing the formation of the Himalayas.



Key:


 Direction of plate movement

Figure 6

(i) What type of mountains are the Himalayas?

(1)

(ii) Give **one** natural hazard caused by the formation of the Himalayas.

(1)



(iii) Outline what happens at:

(4)

1 A divergent plate boundary

.....

.....

.....

.....

2 A conservative plate boundary

.....

.....

.....

.....

(b) Describe the contribution of mineral resources to Pakistan's economy.

(4)

.....

.....

.....

.....

.....

.....

.....

.....

.....

.....



(c) Explain the reasons for the rapid urbanisation taking place in parts of Pakistan today.

(6)

Dotted lines for writing the answer.

(Total for Question 7 = 16 marks)



BLANK PAGE
QUESTION 8 BEGINS ON THE NEXT PAGE.



If you answer Question 8 put a cross in the box .

8 (a) Study Figure 7 which is a cartoon about a cement factory.



Figure 7

(i) Which rock type is used in the production of cement? (1)

(ii) Give **one** type of environmental pollution caused by the manufacture of cement. (1)

(iii) Outline **two** reasons why it is important to have reliable supplies of energy in **all** parts of Pakistan. (4)

1

.....

.....

.....

2

.....

.....

.....



(b) Describe some of the products obtained from Pakistan's forests.

(4)

.....

.....

.....

.....

.....

.....

.....

.....



(c) Explain the factors (other than energy) affecting the location of manufacturing industries in Pakistan.

(6)

Dotted lines for writing the answer.

(Total for Question 8 = 16 marks)

TOTAL FOR PAPER = 60 MARKS



BLANK PAGE



BLANK PAGE

